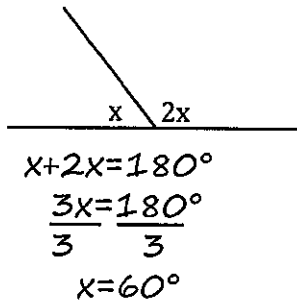


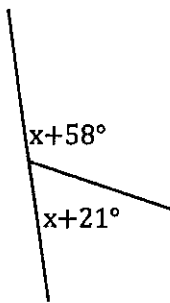
Geometry Homework - Angle Review

For each find the value of the variable. Show all work.

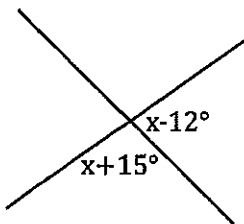
20.



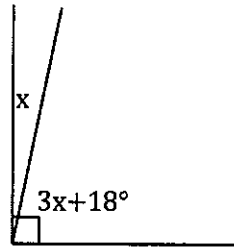
22.



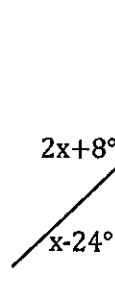
24.



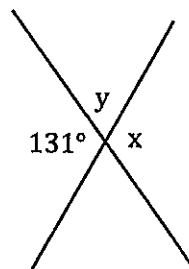
21.



23.



25. Find y, then find x...



26. What do you notice about the value of x in #25?

Bubble all the correct answers from above. Don't bubble incorrect answers.

☐ 40.5°
 ☐ 60°
 ☐ 50.5°
 ☐ 18°
 ☐ 65.3°
 ☐ 88.5°
 ☐ 49°
 ☐ 49.3°
 ☐ 131°
 ☐ 76.5°